



Additional Assessment Materials

Summer 2021

Pearson Edexcel GCE in Chemistry 9CH0

Resource Set 2 – Topic Group 3

Topics included:

Topic 14: Redox II

Topic 15: Transition Metals

(Public release version)

Pearson: helping people progress, everywhere

Pearson aspires to be the world's leading learning company. Our aim is to help everyone progress in their lives through education. We believe in every kind of learning, for all kinds of people, wherever they are in the world. We've been involved in education for over 150 years, and by working across 70 countries, in 100 languages, we have built an international reputation for our commitment to high standards and raising achievement through innovation in education. Find out more about how we can help you and your students at: www.pearson.com/uk

Additional Assessment Materials, Summer 2021

All the material in this publication is copyright

© Pearson Education Ltd 2021

General guidance to Additional Assessment Materials for use in 2021

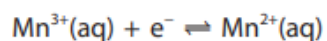
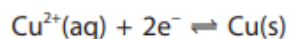
Context

- Additional Assessment Materials are being produced for GCSE, AS and A levels (with the exception of Art and Design).
- The Additional Assessment Materials presented in this booklet are an **optional** part of the range of evidence teachers may use when deciding on a candidate's grade.
- 2021 Additional Assessment Materials have been drawn from previous examination materials, namely past papers.
- Additional Assessment Materials have come from past papers both published (those materials available publicly) and unpublished (those currently under padlock to our centres) presented in a different format to allow teachers to adapt them for use with candidate.

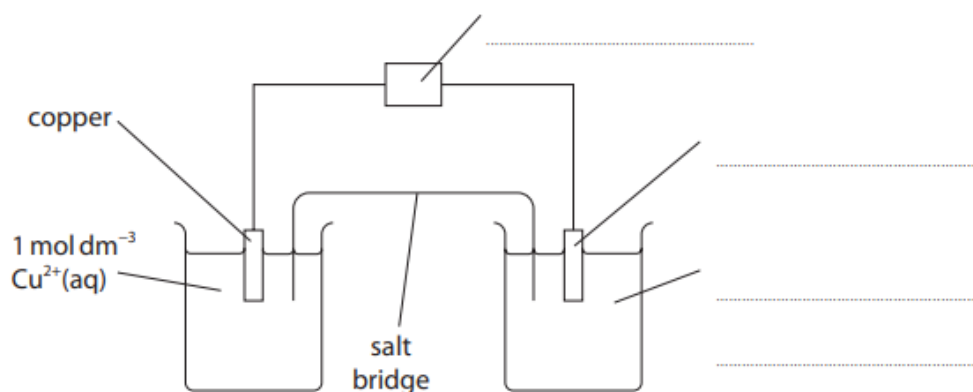
Purpose

- The purpose of this resource is to provide qualification-specific sets/groups of questions covering the knowledge, skills and understanding relevant to this Pearson qualification.
- This document should be used in conjunction with the mapping guidance which will map content and/or skills covered within each set of questions.
- These materials are only intended to support the summer 2021 series.

- 5 An electrochemical cell is made from the electrode systems represented by these half-equations.



The $E_{\text{cell}}^{\ominus}$ value is measured using the apparatus shown.



- (a) Complete the diagram by adding labels on the dotted lines provided.

(3)

- (b) A salt bridge is used to connect the two half-cells.

- (i) State what chemical is contained in the salt bridge.

(1)

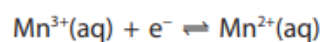
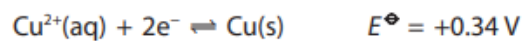
.....

- (ii) Give a possible reason why the salt bridge cannot be replaced by an unreactive metal wire.

(1)

.....

(c) In this cell, the copper is oxidised and $E_{\text{cell}}^{\ominus} = +1.15\text{V}$.



- (i) Write the overall ionic equation for the reaction taking place.
State symbols are not required.

(1)

- (ii) Calculate the value of the standard electrode potential for the
 $\text{Mn}^{3+}(\text{aq}) \mid \text{Mn}^{2+}(\text{aq})$ half-cell.

(1)

(Total for Question 5 = 7 marks)

3 This question is about transition metals and transition metal complexes.

(a) Describe the bonding in the element chromium and use your answer to justify why it has such a high melting temperature.

You may find it helpful to draw a labelled diagram.

(4)

(b) When chromium(III) sulfate dissolves in water, a green solution containing the $[\text{Cr}(\text{H}_2\text{O})_6]^{3+}$ ion forms.

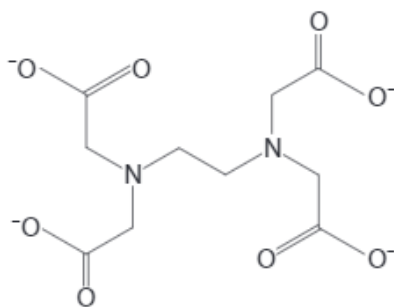
(i) Give the shape of this complex ion.

(1)

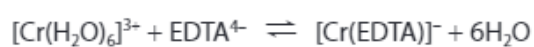
(ii) Explain why the chromium complex ion is coloured.

(3)

(c) The ligand ethylenediaminetetraacetate, EDTA⁴⁻, has the structure shown.



When a solution of EDTA⁴⁻ is added to a solution of [Cr(H₂O)₆]³⁺ ions, a new complex ion is formed.



The equilibrium constant for this equilibrium is $2.51 \times 10^{23} \text{ dm}^3 \text{ mol}^{-1}$.

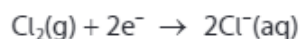
By considering the equilibrium for this reaction and changes in entropy, comment on the value of the equilibrium constant. No calculations are required.

(3)

- (d) Aqueous vanadium(II) chloride, $\text{VCl}_2(\text{aq})$, can be oxidised by bubbling gaseous chlorine, $\text{Cl}_2(\text{g})$, through the solution in the absence of air.

40.0 cm^3 of $0.100 \text{ mol dm}^{-3}$ VCl_2 solution was oxidised by 144 cm^3 of chlorine gas, at room temperature and pressure (r.t.p.).

The chlorine was reduced to chloride ions, according to the half-equation



[Molar volume of a gas at r.t.p. = $24.0 \text{ dm}^3 \text{ mol}^{-1}$]

- (i) Use these data to calculate the final oxidation state of vanadium.
You **must** show your working.

(5)

- (ii) State the initial and final colours you would see as the chlorine bubbles through the aqueous vanadium(II) chloride, $\text{VCl}_2(\text{aq})$.

(2)

(Total for Question 3 = 18 marks)

1 This question is about transition metal chemistry.

(a) The **amphoteric** character of solid chromium(III) hydroxide is shown by the fact that it reacts separately with both dilute hydrochloric acid and dilute sodium hydroxide solution.

(i) Write an **ionic** equation for the reaction of solid chromium(III) hydroxide with dilute hydrochloric acid, showing the formula of the complex ion formed. Include state symbols in your answer.

(2)

(ii) Describe the changes you would **see** when the reaction in (a)(i) is carried out.

(2)

(iii) Write an **ionic** equation for the reaction of solid chromium(III) hydroxide with dilute sodium hydroxide solution, showing the formula of the complex ion formed. Include state symbols in your answer.

(2)

(iv) State the final appearance of the reaction mixture in (a)(iii).

(1)

(b) Dilute aqueous ammonia is added, drop by drop, to an aqueous solution of copper(II) sulfate until the aqueous ammonia is in excess.

(i) Describe what you would **see** during this experiment.

(2)

(ii) The reaction between aqueous copper(II) sulfate and **excess** aqueous ammonia is an example of a **ligand substitution** reaction.

Write an equation for the ligand substitution reaction that occurs, showing the formulae of the complex ions involved. State symbols are not required.

(2)

(Total for Question 1 = 11 marks)

Total for Test = 40 marks